

Y1 Quick start

Finish the number sequence.

30, 40, 50, _____, _____, _____

10, 9, 8, 7, _____, _____, _____

Find the **double** of....

2	6	10

Find the missing numbers

11	12	
70	60	

• Use the pattern to complete the number sentences.

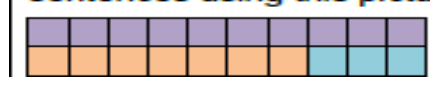
$10+0=$
 $9+_=10$

• Fill in the boxes:

$2 + \square = 10$ $10 - \square = 3$
 $5 + \square = 10$ $10 - \square = 9$
 $\square + 4 = 10$ $10 - 0 = \square$

•

Using the picture we can make 4 number sentences.
 $3 + 2 = 5$ $5 - 2 = 3$
 $2 + 3 = 5$ $5 - 3 = 2$
 Can you write four number sentences using this picture?



Y1 Quick start

Finish the number sequence.

23, 22, 21, _____, _____, _____

11, 21, 31, 41, _____, _____, _____

Write the following numbers in **words**.

15	10	9

Find **half** of....

8	12	16

↑ Complete the number sentences.

	$5 = 5 + 0$
	$5 = 4 + 1$
	$_ = _ + _$
	$_ = _ + _$
	$_ = _ + _$
	$_ = _ + _$

↑ Complete the next bead strings in the sequence.

	$6 = 6 + 0$
	$6 = 5 + 1$
	$6 = 4 + 2$

↑ Can you use a ten frame to show all the number bonds to 7?
Remember to be systematic.

Y1 Quick start

Finish the number sequence.

25, 30, 35, _____, _____, _____

6, 8, 10, 12, _____, _____, _____

Write the **double** of....

14	2	6

Find the missing numbers

26	27	
20	30	

Match the number bonds that are equal.

4 + 5	7 + 1
2 + 6	6 + 3
4 + 2	3 + 3

Use <, > or = to make the statements correct.

5 + 5 ○ 10

5 + 5 ○ 8

2 + 5 ○ 5 + 3

Complete the number sentences.

5 + 3 = 4 + _____

7 + 3 > _____ + 2

Y1 Quick start

Finish the number sequence.

100, 90, 80, _____, _____, _____

2, 4, 6, 8, _____, _____, _____

Write the following numbers in words.

10	40	60

Find the missing numbers

60		70
10		30

How many tractors are there in total?



There are _____ tractors.

6 + _____ = _____

There are 3 aeroplanes at the airport.
5 more aeroplanes land.
How many aeroplanes are there now?



Now there are _____ aeroplanes.

How could we represent this as a number sentence?

There are four pennies in a bag and I add two more.
How many pennies do I have now?



There are _____ pennies.

□ = □ + □

Activate Windows

Go to Settings to activate Windows.

Model Text: Writing Instructions

Below is a set of instructions on how to make a cheese sandwich.

(1) First, get the butter and cheese from the fridge and the bread from the bread bin.

(2) Next, get two slices of bread and butter them with a knife.

(3) Then, pick out a slice of cheese from the packet and place it on the buttered bread.

(4) After, place the other slice on top and cut the bread down the middle with a knife.

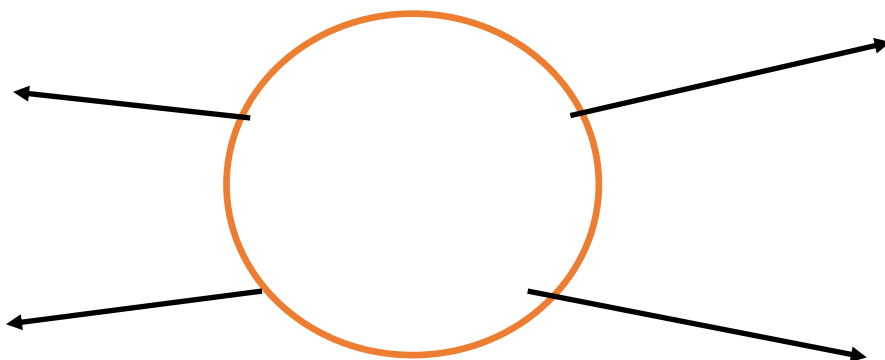
(5) Finally, place the sandwich in a lunchbox or eat it!




Science/Design and Technology Research Task:

What makes up a healthy meal? Write down facts and food you could have in a healthy meal. Then draw a healthy dinner below the lines onto the plate!

My Healthy Dinner Plate with labels!



We are learning to answer comprehension questions on Out and About by Shirley Hughes (Poetry)



Out and About

Shiny boots,

Brand new,

Pale shoots

Poking through.

In the garden,

Out and about,

Run down the path,

Scamper and shout.

Wild white washing,

Waves at the sky,

The birds are busy

And so am I.

Questions

(1) True or False?

True

False

The boots are old

The washing is

The washing waves
at the sky.

(2) What is in the garden in this poem?

Year 1 Sentences: Spotting the spelling mistakes
and re-writing the sentences: Edit and Improve

Task: Can you re-write these sentences using the correct spellings? *Don't forget to spell all other words correctly*

(1) In Science wiy hav been learning abot materials.

(2) Thee Great Firey of London started inn 1666.

(3) Our next tupic is on a futbol theme.

(4) Mr Gud likes futbol and supports a teem colled Sheffield Wednosday.

(5) Londun is a veree busee sity.
