

Y6 Quick Start

- $1.26 \times 4 =$
 $0.02 \times 6 =$
 $0.3 \times 9 =$
- $3.85 + 407 + 8956 =$
- $546 \times \frac{2}{7} =$
- $\frac{2}{6} + \frac{7}{9} =$
- 25% of £90.00 =
- 50% of 800m =
- 90% of 620kg =
- Order the fractions

$\frac{1}{2}$ $\frac{2}{6}$ $\frac{2}{3}$ $\frac{11}{12}$

	Round to 1 D.P.	Round to 2 D.P.
67.876		
21.345		

- For every 4 apples there are 6 oranges. If a box contains 7 apples, how many oranges will there be? _____
- A class contains 40 pupils, for every 7 boys there are 3 girls. How many boys are there in total? _____ How many girls? _____
- A square has a perimeter of 48m. What is the length of each side?
- Convert the following:
 $74m =$ _____ cm $9L =$ _____ ml
 $5.2m =$ _____ cm $560g =$ _____ kg
 $63mm =$ _____ cm $470km =$ _____ m
- $9 \times \frac{2}{3} =$
- $25 \times 3 \frac{2}{5} =$

Y6 Quick Start

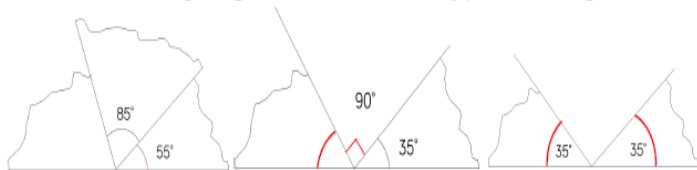
- $1.26 \times 5 =$
 $0.02 \times 7 =$
 $0.3 \times 8 =$
- $9.85 + 807 + 9956 =$
- $19 \times \frac{2}{7} =$
- $\frac{3}{6} + \frac{7}{9} =$
- 27% of £90.00 =
- 11% of 800m =
- 99% of 620kg =
- Ascending order

$\frac{1}{2}$ 67% 0.3 $\frac{4}{5}$ $\frac{1}{10}$

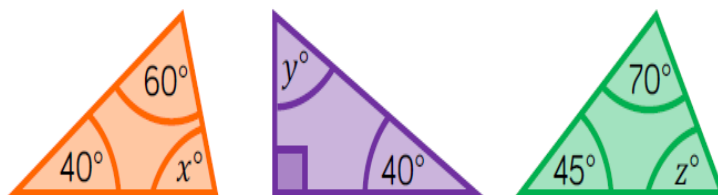
	Round to 1 D.P.	Round to 2 D.P.
27.876		
41.345		

- Convert the following:
 $14m =$ _____ cm $19L =$ _____ ml
 $35.2m =$ _____ cm $570g =$ _____ kg
 $93mm =$ _____ cm $670km =$ _____ m
- $8 \times \frac{2}{3} =$

Find the missing angles and state the type of triangle.



Find the missing angles.



Quick Start Date _____

- $4 \times 1.1 = \underline{\hspace{2cm}}$
- $0.02 \times 0.4 = \underline{\hspace{2cm}}$
- $1.2 \times 2.1 = \underline{\hspace{2cm}}$
- 32% of 300 = $\underline{\hspace{2cm}}$ 13% off £300 = $\underline{\hspace{2cm}}$

8. Order these numbers (ascending)
 0.06 0.409 8.06 0.098 4.003 8.6
- _____

9. 8, 15, 22

What is the formula?

13th term?

100th term?

1st January	8th January	15th January
+ 6C	- 54C	+12 C

5. What is the difference between the temperature on The 1st January and the 8th? _____

6. On the 22nd January the temperature was 7 degrees lower Than on 15th January.

What was the temperature on the 22nd? _____

7. Solve the algebraic sentence below

$a = 5 \quad b = 3 \quad d = 9$

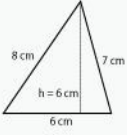
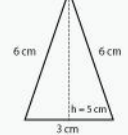
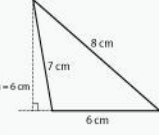
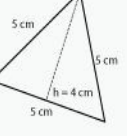
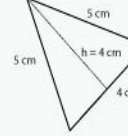
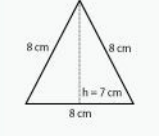
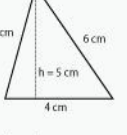
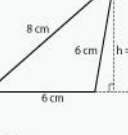
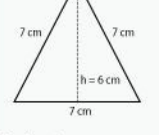
$3a + 5b + 2d = \underline{\hspace{2cm}}$

	<i>Rounded to the nearest</i>
34 567	
6789532	
17.09	

Quick Start Date _____

- $2 \times 0.3 = \underline{\hspace{2cm}}$
- $3856 + 0.8 + 67 = \underline{\hspace{2cm}}$
- $4 \times \underline{\hspace{2cm}} = 68000$
- $\underline{\hspace{2cm}} \times 400 = 64000$
- $4.80 \div 8 = \underline{\hspace{2cm}}$
- $41 \times 12 = \underline{\hspace{2cm}}$
- $341 \times 34 = \underline{\hspace{2cm}}$
- $17\text{cm} = \underline{\hspace{1cm}} \text{mm} \quad 46\text{kg} = \underline{\hspace{1cm}} \text{g}$

9. Calculate the area of the triangles below.

		
Perimeter: _____ Area: _____	Perimeter: _____ Area: _____	Perimeter: _____ Area: _____
		
Perimeter: _____ Area: _____	Perimeter: _____ Area: _____	Perimeter: _____ Area: _____
		
Perimeter: _____ Area: _____	Perimeter: _____ Area: _____	Perimeter: _____ Area: _____

	<i>Rounded to the nearest</i>
59, 689	
909.45	
97.45	

How did the War affect children's everyday lives?

During the war life changed for everybody, including children. For most children, the war years were a time of anxiety. For many, it was a period of family separation. For some, it was a time of profound personal loss. Many children had to grow up quickly during wartime. Many had to look after themselves and younger siblings while their mothers worked.

An Evacuation

Nearly two million children were evacuated from their homes at the start of World War Two. They were evacuated to the countryside to escape the bombing. Children had labels attached to them, as though they were parcels. They stood at railway station not knowing where they were going nor if they would be split from brothers and sisters who had gathered with them. They felt scared about being away from their families and had to adjust to new schools and make new friends.

Rationing

Children experienced a restricted diet because of rationing.

Air Raids

Children lived in fear from the constant threat of air raids. They spent some nights living in air raid shelters just in case German planes dropped bombs on their houses. Their fears came true during the Blitz. One in ten of the deaths during the Blitz of London from 1940 to 1941 were children.

Gas Masks

The government thought that children under five would be scared of the gas masks so they produced a specially designed Micky Mouse gas mask. It was brightly coloured in red and blue.

School Life

Children had to take regular gas drills at school. They found these drills hard to take seriously, especially when they discovered blowing through the rubber made 'rude' noises.

Tasks:

Highlight the main ideas in the text. Using this information, write a summary of the text in the space below.

Reading Questions:

1. Find and highlight the phrase 'profound personal loss'.
2. What does this phrase mean?
3. Find and highlight the word 'anxiety' what do you think it means?
4. Find and highlight the phrase 'their fears came true'.
5. What do you think the author means?
6. Find and highlight the phrase 'adjust'. What do you think it means?
7. Find and highlight the word 'restricted'. What do you think it means?
8. Write five of your own questions about the text.

SPAG

Use the word 'brush' in a sentence as a noun and as a verb.

Noun: _____

Verb: _____

Use the word 'cover' in a sentence as a noun and as a verb.

Noun: _____

Verb: _____

Write x 5 complex sentences with accurate use of comas (try and vary the position of the subordinate clause)

Write x 5 sentences using a ; for lists or in a sentence.

Write x 5 sentences using dashes

Write x 5 sentences using a colon

How many hyphenated words can you think of?

Tick the correct box:

	personal pronoun	relative pronoun	possessive pronoun
hers			
Which			
he			

	Common Noun	Collective Noun	Proper Noun	Abstract Noun
Shoe				
Bunch				
Fear				
Ruby				