

### Y1 Quick start

Finish the number sequence.

14, 16, 18, \_\_\_\_\_, \_\_\_\_\_, \_\_\_\_\_

25, 30, 35, 40, \_\_\_\_\_, \_\_\_\_\_, \_\_\_\_\_

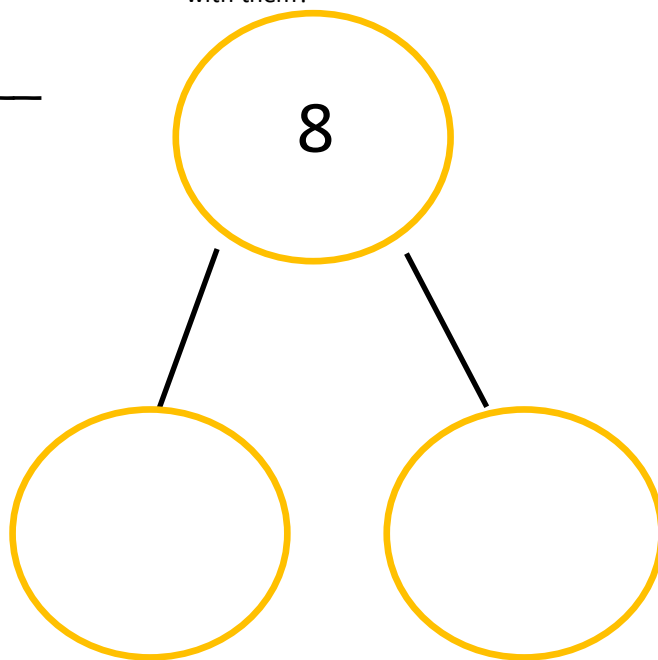
Find **half of**:

4	8	12

Find the **missing numbers**

64		68
90	95	

Write down all the possible bonds to make 8 in the part whole model. Can you write the number sentences to go with them?



### Y1 Quick start

Finish the number sequence.

90, 89, 88, \_\_\_\_\_, \_\_\_\_\_, \_\_\_\_\_

6, 8, 10, 12, \_\_\_\_\_, \_\_\_\_\_, \_\_\_\_\_

Can you fill in the number bond to 10 table?

Write the matching bond to 20 ( $14 + 6 = 20$ ).

5	16	2

Find **1 less than**...

6	25	4

4	
	0
10	
2	
8	
1	

### Y1 Quick start

Finish the number sequence.

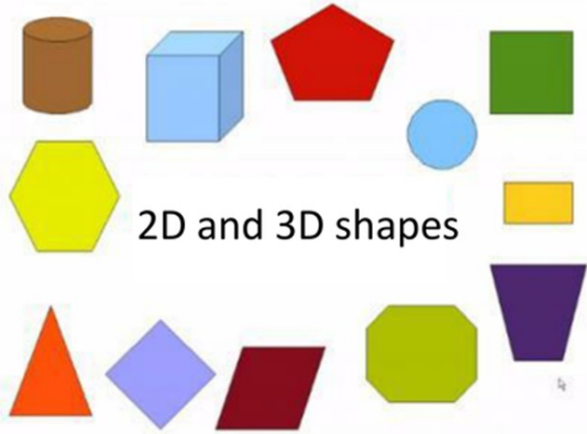
20, 22, 24, \_\_\_\_\_, \_\_\_\_\_, \_\_\_\_\_

27, 30, 33, 36, \_\_\_\_\_, \_\_\_\_\_, \_\_\_\_\_

Jessica says a cube is a 3d square and a cylinder is a 3d circle. Is she right? Give reasons.

Write **one fewer** than....

10	20	30



Find the **missing numbers**

60	65	
50		70

### Y1 Quick start

Finish the number sequence.

19, 21, 23, \_\_\_\_\_, \_\_\_\_\_, \_\_\_\_\_

42, 43, 44, \_\_\_\_\_, \_\_\_\_\_, \_\_\_\_\_

Write the matching pairs to 20!

Measure the length of these lines:


Line 3 is	Line 2 is

14	
16	
11	
19	
10	
7	
3	
2	

Find the **missing numbers**:

20		24
71		73

## Model Text: *Using the facts you collected*



### Tips from Mr Good:

Usually I would point you in the direction of Wikipedia or Google, but some of the information can be quite complicated.

However, if you use Wiki Simple, then the facts presented should be a little easier to understand and more reasonable.

The report should be simple and should focus on the key facts you wrote down, written into a longer report.

I hope this makes sense .

*last week you are now going to write a short report on the history of English football.*



## Science/Art: Making Your Own Garden

This is a fun activity linking art and science together. I would like you to create your dream garden with the most wonderful things in it you can think of. However, you must have 5 different type of tree/plant/shrub in this garden and know what they are. Let your imagination run wild!

### My Wonderful Garden!

*What five plants/trees have you used?*

- 1.
- 2.

We are learning to answer comprehension questions about Handa's Surprise by Eileen Brown.



Handa put seven delicious fruits in a basket for her friend, Akeyo.

Questions

(1) True  
or False?

	True	False
Handa put six fruits in her basket.		
Her friend was called Akeyo.		
She carries the fruit in a tin.		

---

---

# Year 1 Alien and Real Word Task (Week 2)


Task: Read the word

and decide

whether it  
is alien or re-

al.

REAL



Word	Real	Alien
sprong		
splike		
froke		
light		
crink		
happy		
ripped		

---

Re-write the sentences using correct punctuation.

(1) learning about phonics is fun mr good teaches us

---