

Year 4 Quick Starts

$$\begin{array}{r} 4 \\ \times 7 \\ \hline \end{array}$$

$$\begin{array}{r} 12 \\ \times 9 \\ \hline \end{array}$$

$$\begin{array}{r} 10 \\ \times 9 \\ \hline \end{array}$$

$$\begin{array}{r} 7 \\ \times 7 \\ \hline \end{array}$$

$$\begin{array}{r} 5 \\ \times 7 \\ \hline \end{array}$$

$$\begin{array}{r} 12 \\ \times 8 \\ \hline \end{array}$$

$$\begin{array}{r} 3 \\ \times 9 \\ \hline \end{array}$$

$$\begin{array}{r} 8 \\ \times 7 \\ \hline \end{array}$$

$$\begin{array}{r} 6 \\ \times 7 \\ \hline \end{array}$$

$$\begin{array}{r} 10 \\ \times 7 \\ \hline \end{array}$$

$$\begin{array}{r} 8 \\ \times 9 \\ \hline \end{array}$$

$$\begin{array}{r} 4 \\ \times 8 \\ \hline \end{array}$$

$$\begin{array}{r} 7 \\ \times 7 \\ \hline \end{array}$$

$$\begin{array}{r} 7 \\ \times 8 \\ \hline \end{array}$$

$$\begin{array}{r} 2 \\ \times 9 \\ \hline \end{array}$$

$$\begin{array}{r} 6 \\ \times 9 \\ \hline \end{array}$$

$$\begin{array}{r} 9 \\ \times 7 \\ \hline \end{array}$$

$$\begin{array}{r} 4 \\ \times 9 \\ \hline \end{array}$$

$$5 \overline{)263}$$

$$2 \overline{)123}$$

$$9 \overline{)545}$$

$$3 \overline{)205}$$

$$2 \overline{)161}$$

$$9 \overline{)804}$$

$$8 \overline{)707}$$

$$3 \overline{)157}$$

$$4 \overline{)274}$$

$$5 \overline{)133}$$

$$9 \overline{)813}$$

$$7 \overline{)414}$$

$$1) 92 + \underline{\quad} = 100$$

$$2) 74 + \underline{\quad} = 100$$

$$3) 39 + \underline{\quad} = 100$$

$$4) \underline{\quad} + 11 = 100$$

$$5) 1 + \underline{\quad} = 100$$

$$6) 6 + \underline{\quad} = 100$$

$$7) 7 + \underline{\quad} = 100$$



$$8) 55 + \underline{\quad} = 100$$

$$9) \underline{\quad} + 60 = 100$$

$$10) 47 + \underline{\quad} = 100$$

Year 4 Quick Starts

Match the analogue to the digital by drawing a line between clocks with the same time.



Write the Correct Comparison Symbol (> , < or =) in Each Box

1) 3.63 3.59

11) 8.47 0.847

2) 2.27 2.35

12) 1.28 1.33

3) 7.28 7.29

13) 4.32 4.27

4) 1.22 0.122

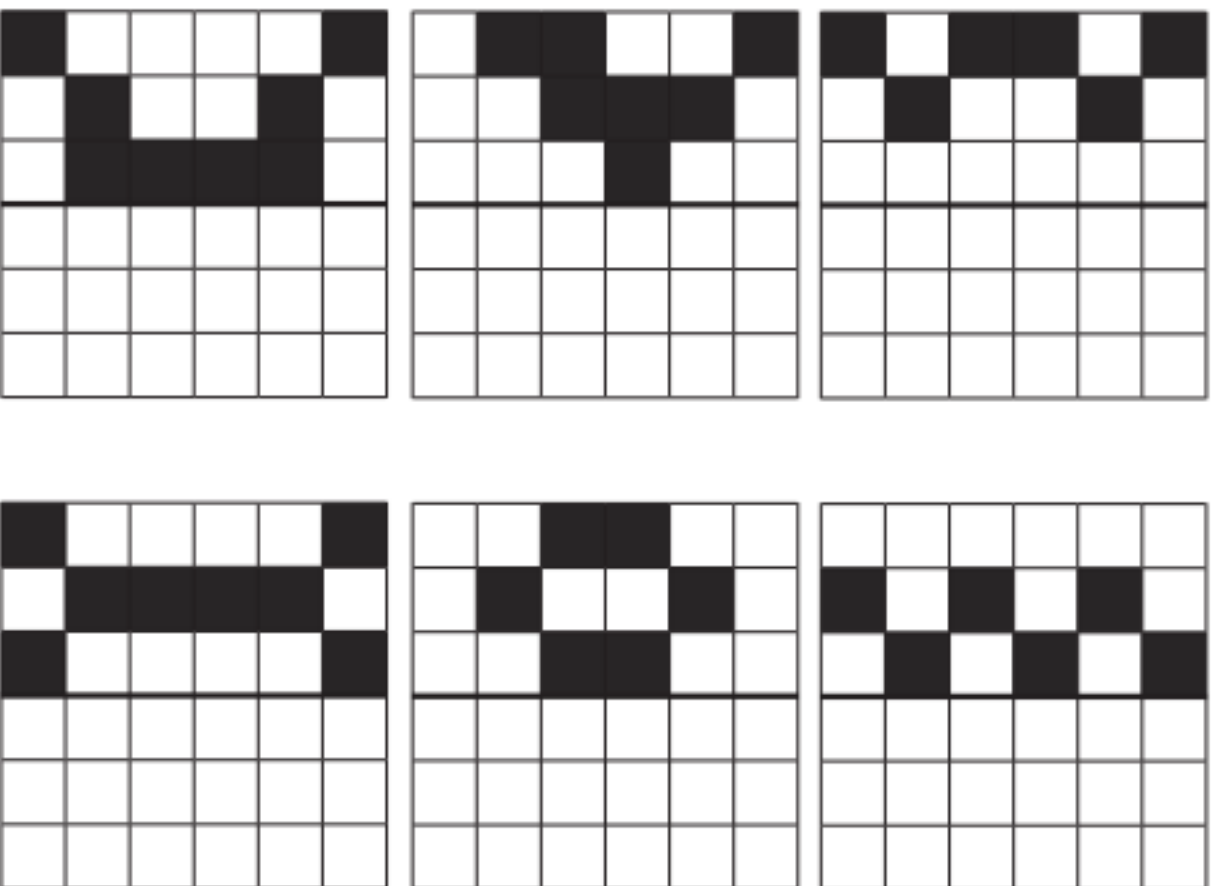
14) 9.37 0.937

5) 7.6 0.76

15) 7.55 0.755

Symmetry

Complete the pictures by shading the squares in.

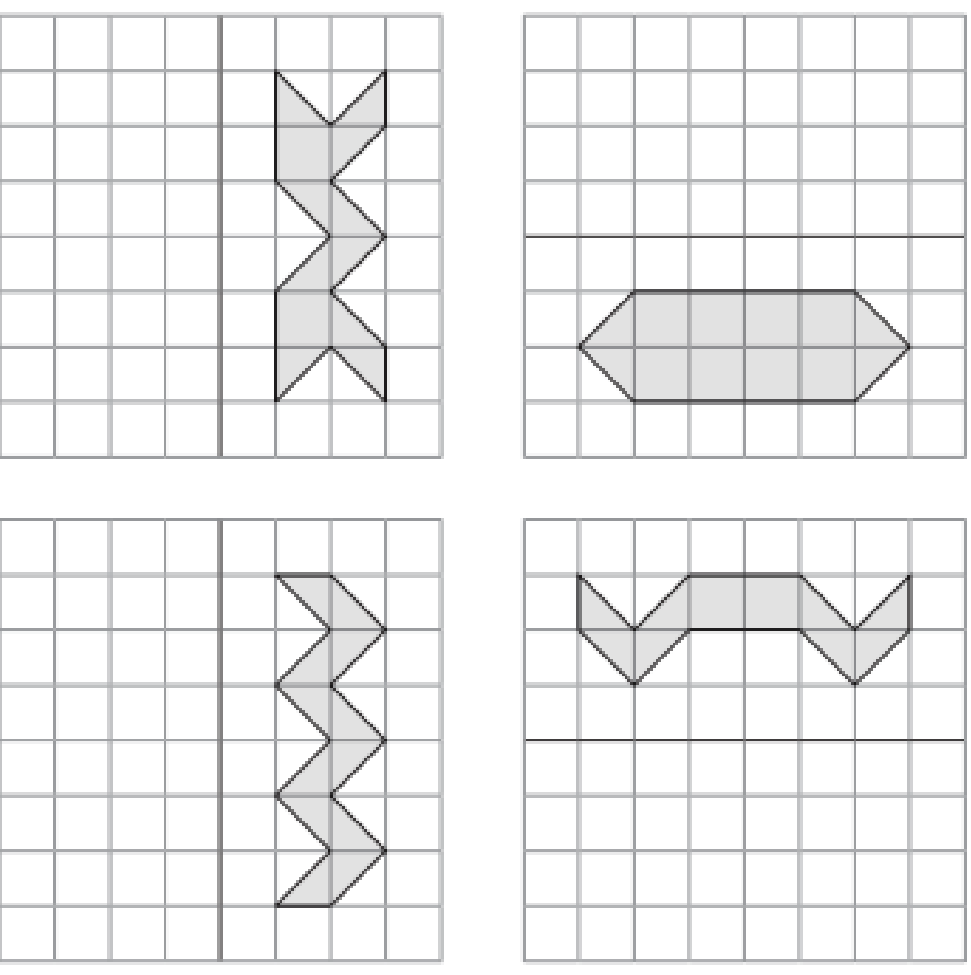


Simple Reflection Figures

Aim: I can draw a reflection in a mirror line.

Draw the reflection of each figure using the mirror line.


Remember to turn your paper so the mirror line is vertical. (It can be helpful to hold the paper up in front of your eyes to check the reflection.)



Writing Task:

Non-chronological Report — Create an information report about Dragons Eggs. You will need to include an introduction, sub-headings and information about 3 of the eggs

Remember to use capital letters and full stops. Challenge: Can you use similes and adventurous adjectives to describe why each egg is important? (Imagine you were writing a Harry Potter style text).



Handwriting practice lines for the report.

Research Task:

The History topic for this term is local sports teams. Can you research and present information about a famous Hull City football player?



A series of horizontal lines for writing, starting with a set of five lines on the left side of the page and continuing with a full-width set of lines below the crest.

One Tiny Mistake

- 10 When I received my first magic wand for my twelfth
20 birthday, I could not have been more excited. I imagined
30 pointing it towards a pile of dirty clothes and having
39 them magically cleaned and folded before my eyes. I'd
47 dreamed about turning my vegetables invisible so I
58 didn't have to eat them for dinner. I never imagined that
69 I would spend the next year of my life trapped inside
71 a bottle.
- 83 One tiny, little spell gone wrong was all it took to shrink
95 me. My family think that I ran away to a school for
105 witches. They knew it had always been my dream. What
117 they don't know is that I've been here all along; sat on
128 the dusty shelf in my old bedroom, tapping on the glass
137 and praying that one day they will hear me.



Quick Questions



1. Where is the narrator of this story?



2. Did the narrator mean for this to happen? Use evidence from the text to support your answer.



3. What story do you know that has a similar theme?



4. Sum up the story in 20 words or less.

Gary's Big Adventure

- 11 Gary knew that he needed to find a vantage – a place
22 which would give him a good view of the entire rainforest.
34 Without that, a tiny frog like him would never be able to
45 find them. But where could he go? He was surrounded by
54 acres of thick, dense vegetation. No cliffs. No waterfalls.
65 Suddenly, he had an idea. He stretched out his toes as
75 wide as they would go and jumped towards the nearest
84 tree trunk. Clinging on, he climbed higher and higher
94 until he finally reached the canopy. He stood atop the
101 wide-reaching fronds, looking towards the horizon in
111 search of two tiny, blue specks, which looked just like
122 him. Just as he had given up hope, an auburn orangutan
132 swung by, carrying two sticky, blue lumps on her back...



Quick Questions



1. Which two tall, natural features was Gary unable to go to? _____



2. 'Gary knew that he needed to find a vantage...' What do you think vantage means in this sentence? _____



3. Who do you think Gary is looking for? Use evidence from the text to support your answer. _____



4. What do you think Gary will do next? _____

Add the missing verb to this sentence so that is grammatically correct.



Racing down the track, the steam train _____ nearly up to top speed.

a

Which of these sentences is missing an apostrophe? Where should it go?

"Whos that knocking at my door?" asked Grandma.

The wolf, whose fur was hidden under a cloak, pretended to be Little Red Riding Hood.

c

Can you insert a plural possessive apostrophe in the correct place in this sentence?



The boys nerves were jangling.

b

Mr Whoops has got in a terrible muddle with his 'sc' words that sound like a /s/. Can you help him to match each definition with the correct word?

_____ - the shape of the moon at certain times of the month
 _____ - to go down



d

Sort these words into the table:

determiners	prepositions

among much into every

e



Underline the subordinate clause in this sentence.

Van Gogh painted a self-portrait because he couldn't afford a model.

f

Add the missing verb to this sentence so that is grammatically correct.



Racing down the track, the steam train _____ nearly up to top speed.

a

Which of these sentences is missing an apostrophe? Where should it go?

"Whos that knocking at my door?" asked Grandma.

The wolf, whose fur was hidden under a cloak, pretended to be Little Red Riding Hood.

c

Can you insert a plural possessive apostrophe in the correct place in this sentence?



The boys nerves were jangling.

b

Mr Whoops has got in a terrible muddle with his 'sc' words that sound like a /s/. Can you help him to match each definition with the correct word?

_____ - the shape of the moon at certain times of the month
 _____ - to go down



d

Sort these words into the table:

determiners	prepositions

among much into every

e



Underline the subordinate clause in this sentence.

Van Gogh painted a self-portrait because he couldn't afford a model.

f