

Year 4 Quick Starts

$$\begin{array}{r} 8 \\ \times 11 \\ \hline \end{array}$$

$$\begin{array}{r} 5 \\ \times 12 \\ \hline \end{array}$$

$$\begin{array}{r} 7 \\ \times 12 \\ \hline \end{array}$$

$$\begin{array}{r} 10 \\ \times 11 \\ \hline \end{array}$$

$$\begin{array}{r} 3 \\ \times 10 \\ \hline \end{array}$$

$$\begin{array}{r} 8 \\ \times 12 \\ \hline \end{array}$$

$$\begin{array}{r} 2 \\ \times 11 \\ \hline \end{array}$$

$$\begin{array}{r} 12 \\ \times 12 \\ \hline \end{array}$$

$$\begin{array}{r} 2 \\ \times 12 \\ \hline \end{array}$$

$$\begin{array}{r} 5 \\ \times 12 \\ \hline \end{array}$$

$$\begin{array}{r} 6 \\ \times 11 \\ \hline \end{array}$$

$$\begin{array}{r} 9 \\ \times 11 \\ \hline \end{array}$$

$$\begin{array}{r} 7 \\ \times 10 \\ \hline \end{array}$$

$$\begin{array}{r} 7 \\ \times 11 \\ \hline \end{array}$$

$$\begin{array}{r} 10 \\ \times 10 \\ \hline \end{array}$$

$$\begin{array}{r} 12 \\ \times 11 \\ \hline \end{array}$$

$$\begin{array}{r} 2 \\ \times 12 \\ \hline \end{array}$$

$$\begin{array}{r} 4 \\ \times 12 \\ \hline \end{array}$$

$$\begin{array}{r} 670 \\ \times 3 \\ \hline \end{array}$$

$$\begin{array}{r} 328 \\ \times 9 \\ \hline \end{array}$$

$$\begin{array}{r} 714 \\ \times 3 \\ \hline \end{array}$$

$$\begin{array}{r} 253 \\ \times 2 \\ \hline \end{array}$$

$$\begin{array}{r} 524 \\ \times 4 \\ \hline \end{array}$$

$$\begin{array}{r} 630 \\ \times 4 \\ \hline \end{array}$$

$$\begin{array}{r} 645 \\ \times 4 \\ \hline \end{array}$$

$$\begin{array}{r} 128 \\ \times 2 \\ \hline \end{array}$$

Round each number to the nearest hundred.

1) 5,234 _____

6) 3,546 _____

2) 1,435 _____

7) 4,217 _____

3) 9,671 _____

8) 6,876 _____

4) 9,131 _____

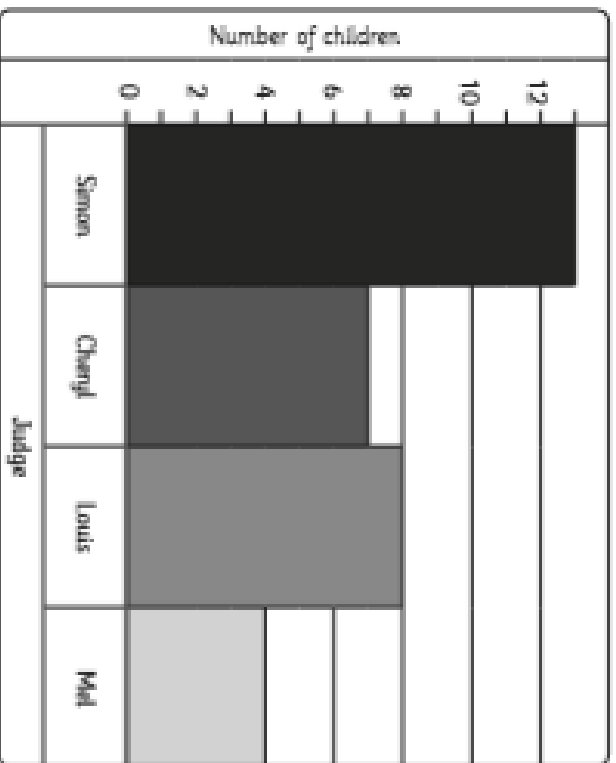
9) 4,267 _____

5) 2,343 _____

10) 6,395 _____



1. Here is a bar chart showing Year 4's favourite X-Factor Judges:



a) How many children like Cheryl the best?


b) How many more children prefer Simon than Louis?

c) Chris was absent when the survey was taken, he said he liked Louis the best, so including Chris' vote, how many children liked Louis the best?

2. Year 4 did a survey outside school and collected the following data regarding the colours of cars that passed their school:

colour of car	number that passed by
red	20
blue	16
silver	9
white	5
gold	1
yellow	2

a) Use the data to draw a bar chart on the grid below. Make sure you label the axes, give the chart a title and choose a suitable scale for the axes.



A Storm is Brewing...

- 11 Dale was in the garden playing fetch with Patch, a tiny
20 brown and white puppy they had brought home only
29 three days before. Quite unexpectedly, Dale heard a loud
40 rumble and saw, from the corner of his eye, flashes of
49 light in the sky. "What is happening?" muttered Dale.
- 57 Suddenly, Dale heard Mum shouting from the kitchen.
66 "Get inside quickly, Dale!" she yelled with urgency in
76 her voice. This worried Dale, so he swiftly ran towards
86 the house. Unsure what to make of the situation, Patch
94 sauntered after him, stopping occasionally to shake the
98 rain from his fur.
- 108 "Mum, why is the sky making strange noises and what
115 are all of those lights?" asked Dale.
- 123 "It is thunder and lightning, Dale," explained Mum.



Quick Questions



1. Find and copy an adverb from the text which means the same as 'quickly'.



2. How long had Dale had Patch?



3. What do you think Dale and Patch did next?



4. How does the author show the reader that Patch is not really bothered about the thunderstorm?

An Extract from Howard Carter's Diary

4th November 1922

- 11 After the discovery of the first step, we exposed fifteen more
20 steps leading down to an ancient doorway, still sealed
31 after all these years. The name on the door was clear:
41 Tutankhamen. They say this tomb is cursed; they say that
49 the ancient pharaoh threatened anyone who disturbed his
62 peace in the afterlife but that will not stop me. For five years
72 we have been digging through the inhospitable desert and I
80 am finally about to make the most important
87 discovery of my life. At last, I
94 will be the one to unearth the
99 final resting place of Egypt's
102 youngest pharaoh. It
106 will be filled with
108 treasures beyond
110 anyone's wildest
111 dreams.



Quick Questions



1. In what year was this text written?



2. Do you think Howard Carter was scared? Use evidence from the text to support your answer.



3. Sum up the main points of this extract in 20 words or less.



4. What do you think happened next?

Underline the verbs in these sentences.

During the downhill final, the Norwegian skier had a successful run. She swooped around the flags and only knocked one of them over.



a

Can you think of the sub- prefix words to match these definitions?

an underwater vessel

sub _____

b

Join the prefixes to the correct root words:

inter-

market

super-

pilot

auto-

national

e

Can you underline the **two** determiners in these sentences?

The dimorphodon was a flying dinosaur that lived in prehistoric times.



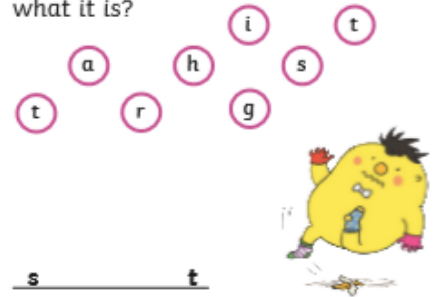
c

Write a present progressive sentence about this picture.



d

Mr Whoops has been juggling with the letters from one of his Y4 spelling words. Can you spot what it is?



f

Place a comma after the fronted adverbial in the sentence and then underline the subordinate clause.



With his arms outstretched the evil pea shouted at the shocked crowd.

a

Think of **two** different adverbs that could describe this verb:

"What was that noise?" asked the boy _____.

"What was that noise?" asked the boy _____.

b

Clumsy Mr Whoops has lost all the words from this word family. Can you help him to find **two** of them?

cent



c

Can you fill the spaces using the correct word?

(there/their/they're)

1. They put on _____ coats.

2. _____ was a squirrel in the garden.

3. "_____ playing well today!" said the coach.

d

Tick all the sentences that contain a conjunction.

After he had breakfast, Clinton set off for school.

He ate a chocolate mousse after his sandwich.

e

Explain what is wrong about this sentence and correct it.

The yoga instructor are demonstrating the pose to the class.



f