


Year 2 Quick Start

19.10.20

1. Find 1 less and 1 more.

One Less		One More
	5	
	10	
	13	

2. Write the number sentence.



+ =

3. $3 + 1 =$

4. $4 + 2 =$

5. $3 + 3 =$


Year 2 Quick Start

20.10.20

1. Find 1 less and 1 more.

One Less		One More
	7	
	12	
	15	

2. Write the number sentence.



+ =

3. $7 + 2 =$

4. $4 + 4 =$

5. $9 + 1 =$


Year 2 Quick Start

21.10.20

1. Find 1 less and 1 more.

One Less		One More
	3	
	9	
	18	

2. Write the number sentence.



+ =

3. $11 + 1 =$

4. $13 + 2 =$

5. $5 + 5 =$

Year 2 Quick Start

22.10.20

1. Find 1 less and 1 more.

One Less		One More
	8	
	14	
	20	

2. Write the number sentence.

- =

3. $10 + 2 =$

4. $20 + 1 =$

5. $3 + 4 =$


Year 2 Quick Start

23.10.20

1. Find 1 less and 1 more.

One Less		One More
	17	
	6	
	23	

2. Write the number sentence.



- =

3. $9 + 3 =$

4. $6 + 6 =$

5. $15 + 2 =$

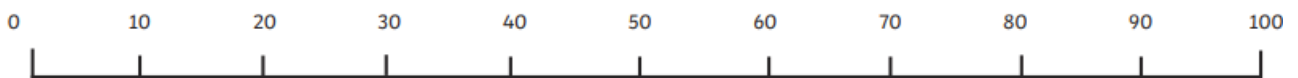
Year 2 Quick Start

19.10.20

1. Find 1 less and 1 more.

One Less		One More
	23	
	40	

2. Draw an arrow to the number 25.



3. $7 + 7 =$

4. $16 + 4 =$

5. $22 - 4 =$

6. $35 - 10 =$

Challenge

Partition 34 into tens and ones in as many ways as you can.

___ + ___ = 34

___ + ___ = 34

___ + ___ = 34

___ + ___ = 34

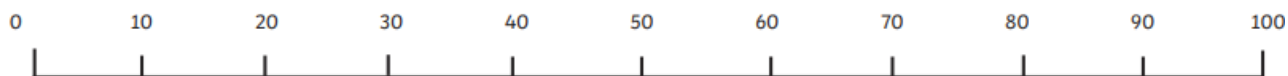
Year 2 Quick Start

20.10.20

1. Find 1 less and 1 more.

One Less		One More
	39	
	65	

2. Draw an arrow to the number 55.



3. $9 + 9 =$

4. $9 + 11 =$

5. $18 - 5 =$

6. $41 - 7 =$

Challenge

Partition 42 into tens and ones in as many ways as you can.

___ + ___ = 42

___ + ___ = 42

___ + ___ = 42

___ + ___ = 42

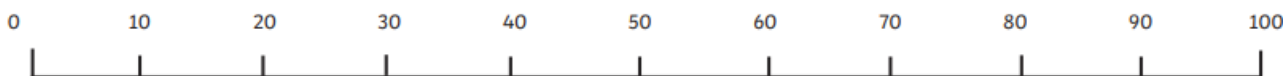
Year 2 Quick Start

21.10.20

1. Find 1 less and 1 more.

<i>One Less</i>		<i>One More</i>
	31	
	78	

2. Draw an arrow to the number 75.



3. $10 + 10 =$

4. $24 + 9 =$

5. $25 - 4 =$

6. $35 - 8 =$

Challenge

Partition 51 into tens and ones in as many ways as you can.

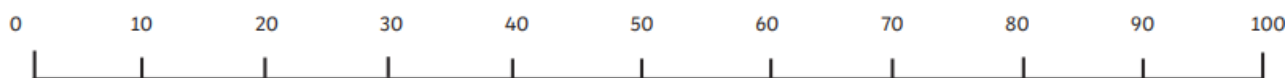
Year 2 Quick Start

22.10.20

1. Find 1 less and 1 more.

<i>One Less</i>		<i>One More</i>
	84	
	52	

2. Draw an arrow to the number 98.



3. $11 + 10 =$

4. $12 + 13 =$

5. $67 - 9 =$

6. $32 - 10 =$

Challenge

Partition 29 into tens and ones in as many ways as you can.

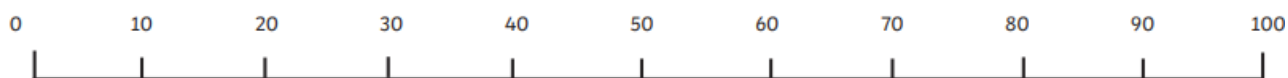
Year 2 Quick Start

23.10.20

1. Find 1 less and 1 more.

<i>One Less</i>		<i>One More</i>
	50	
	96	

2. Draw an arrow to the number 41.



3. $20 + 10 =$

4. $15 + 21 =$

5. $92 - 6 =$

6. $45 - 10 =$

Challenge

Partition 64 into tens and ones in as many ways as you can.