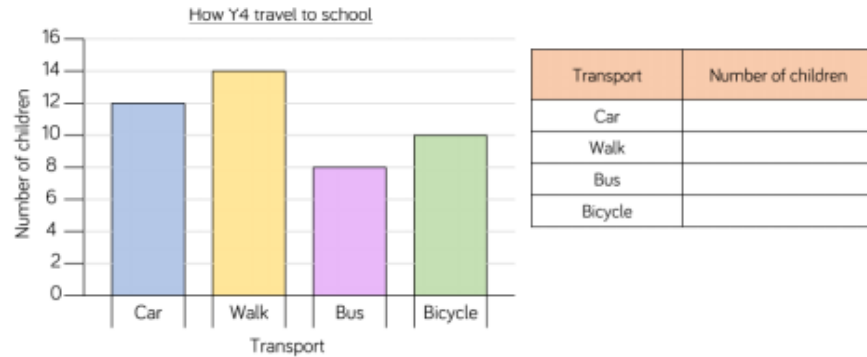


To be able to use bar charts, pictograms and tables to present and identify data.

Complete the table using the information in the bar chart.



What is the most/least popular way to get to school?  
How many children walk to school?

Produce your own table, bar chart or pictogram showing how the children in your class travel to school.

Represent the data in each table as a bar chart.

Team	Number of house points
Sycamore	
Oak	
Beech	
Ash	

= 20 points

Day	Number of tickets sold
Monday	55
Tuesday	30
Wednesday	45
Thursday	75
Friday	85


©White Rose Maths

Alex wants to use a pictogram to represent the favourite drinks of everyone in her class.






I will use this image to represent 5 children.


Explain why this is not a good idea.



## Interpret charts

- 1 The pictogram shows the number of ice creams sold in a shop.

Ice cream flavour	Number of ice creams sold
vanilla	
chocolate	
strawberry	
mint choc	

Key  = 2 ice creams

- a) How many vanilla ice creams were sold?

b)



The shop sold  
6 chocolate ice creams.

What mistake has Annie made?

---

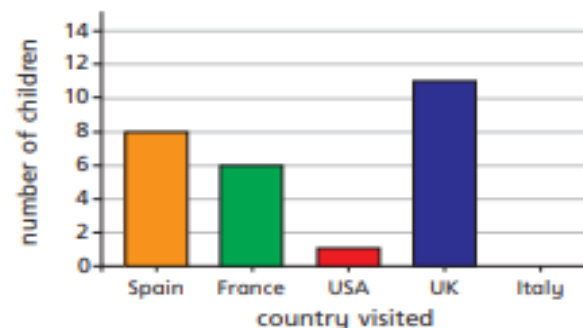


---

- c) How many chocolate ice creams were sold?
- d) How many strawberry ice creams were sold?
- e) Seven mint choc ice creams were sold.  
Complete the pictogram to show this.



- 2 The bar chart shows the number of children who went on holiday to some different countries.



- a) Complete the table using the information in the bar chart.

Country	Number of children visiting
Spain	
France	
USA	
UK	
Italy	

- b) Complete the pictogram using the information in the bar chart.

Country	Number of children visiting
Spain	
France	
USA	
UK	
Italy	

Key  = 4 children