

Fill in the Missing Numbers

1		3				7		9	10
11			14	15		17	18		
	22						28	29	30
	32		34			37			40
41			44			47		49	50
51			54	55			58		60
61		63	64			67		69	70
	72	73		75	76		78		
81	82						88		90
91			94	95		97		99	100

© <http://worksheetsplaza.com>

Fill in the missing numbers!

Maths Home Learning:

Wednesday

Fluency: Write in the missing numbers to complete the bonds to 10.

(1) $10 + \square = 10$

(2) $1 + \square = 10$

(3) $5 + \square = 10$

(4) $\square + 7 = 10$

(5) $0 + \square = 10$

(6) $2 + \square = 10$

(7) $9 + \square = 10$




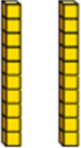

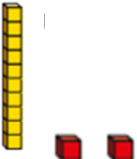
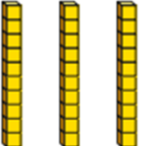
(8) $7 + \square = 10$

(9) $6 + \square = 10$

(10) $4 + \square = 10$

Maths Home Learning: Thursday

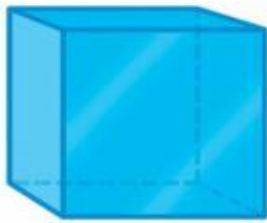
Fluency: Write in the number the tens and ones show.

Pictorial	What is the number shown?
	
	
	
	
	
	
	

Maths Home Learning: Friday

Fluency: Can you name all the 3d shapes?

--	--	--



--	--	--

What are sides called on 3d shapes?

--

